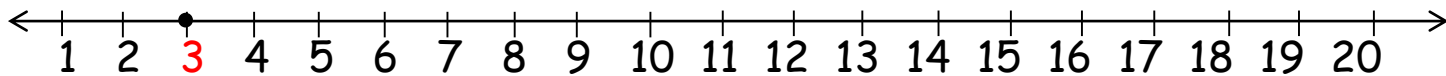


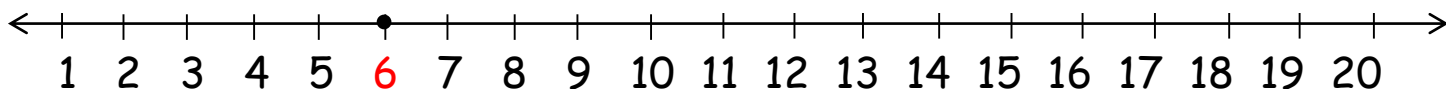
Addition Using a Number Line



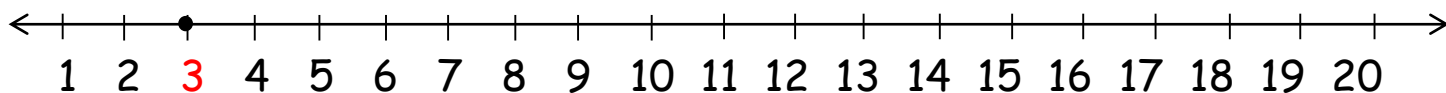
$3 + 5 = \underline{\quad}$



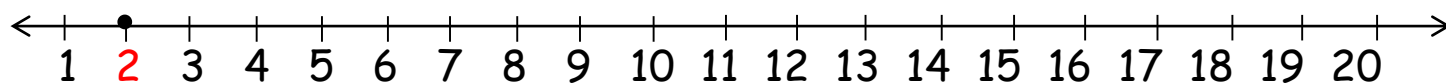
$6 + 5 = \underline{\quad}$



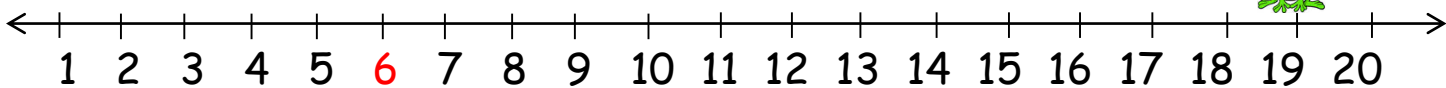
$3 + 2 = \underline{\quad}$



$2 + 7 = \underline{\quad}$



$6 + 4 = \underline{\quad}$



$5 + 5 = \underline{\quad}$

